



COMMUNITY  
SPORTS  
TRUST

SUPPORTED BY  *Vitality*

# ACTIVITY BOOK

THIS WORKBOOK BELONGS TO:





VOLUME 4



## ACTIVITY I

# ESCAPE THE MAZE



Can you help Jack Wilshere dribble through the maze to score a goal?

## ACTIVITY 2

# SPOT THE DIFFERENCE



There are five differences between the two pictures above, can you find them all?

### ACTIVITY 3

## BRAIN TEASERS


$$+ = 30$$

How much is



worth?


$$+ = 20$$

How much is



worth?


$$\times = 9$$

How much is



worth?


$$+ \text{ (one white jersey) } \times \text{ (one light blue jersey) } =$$


$$\times \text{ (one white jersey) } - \text{ (one light blue jersey) } =$$

## ACTIVITY 4

# TOP GOALSCORERS




**ARNAUT  
DANJUMA**  
5



**JUNIOR  
STANISLAS**  
7



**DOMINIC  
SOLANKE**  
10



**HELEN  
CORBIN**  
4



**MOLLY  
CLARK**  
14



**HANNAH  
BENNETT**  
7

1. Which player has scored the most goals overall?

2. Which groups have scored the most goals  
Clark/Corbin/Danjuma or  
Solanke/Stanislas/Bennett?

3. What is the total amount of goals scored by all 6 players?

4. Which of these players are forwards?



***YOU'VE  
DONE IT!***

***ACTIVITY BOOK COMPLETED***



**COMMUNITY  
SPORTS  
TRUST**

SUPPORTED BY  *Vitality*